





Y1 Sp12	YEAR 1 - SPRING TEST 12		
First Name		Class	
Last Name		Date	
		TOTAL MARKS	/10

1	$8 - 3 =$	<input style="width: 100px; height: 20px;" type="text"/> 	<input style="width: 40px; height: 40px;" type="text"/> 1 mark
---	-----------	--	---

2	$19 - \square = 10$	<input style="width: 100px; height: 20px;" type="text"/> 	<input style="width: 40px; height: 40px;" type="text"/> 1 mark
---	---------------------	---	---

3	$2 + 0 =$	<input style="width: 100px; height: 20px;" type="text"/> 	<input style="width: 40px; height: 40px;" type="text"/> 1 mark
---	-----------	--	---

4	$\square + 1 = 15$	<input style="width: 100px; height: 20px;" type="text"/> 	<input style="width: 40px; height: 40px;" type="text"/> 1 mark
---	--------------------	--	---

5	$11 - 1 =$	<input style="width: 100px; height: 20px;" type="text"/> 	<input style="width: 40px; height: 40px;" type="text"/> 1 mark
---	------------	--	---

6

$$16 + \square = 17$$



1 mark

7

$$\square - 1 = 12$$



1 mark

8

$$10 + 4 =$$



1 mark

9

$$\square - 9 = 3$$



1 mark

10

$$16 - 10 =$$



1 mark