






Y2 Sp12	YEAR 2 - SPRING TEST 12		
First Name		Class	
Last Name		Date	
		TOTAL MARKS	/12


1	$\square = 5 - 4$	<input style="width: 100%; height: 20px;" type="text"/> 	<input style="width: 60%; height: 60px;" type="text"/> 1 mark
---	-------------------	---------------------------------------------------------------------------------------------------------------------------------------------	------------------------------------------------------------------

2	$\frac{1}{2}$ of $\square = 12$	<input style="width: 100%; height: 20px;" type="text"/> 	<input style="width: 60%; height: 60px;" type="text"/> 1 mark
---	---------------------------------	---------------------------------------------------------------------------------------------------------------------------------------------	------------------------------------------------------------------


3	$4 + 2 + 1 =$	<input style="width: 100%; height: 20px;" type="text"/> 	<input style="width: 60%; height: 60px;" type="text"/> 1 mark
---	---------------	-----------------------------------------------------------------------------------------------------------------------------------------------	------------------------------------------------------------------


4	$7 + 9 =$	<input style="width: 100%; height: 20px;" type="text"/> 	<input style="width: 60%; height: 60px;" type="text"/> 1 mark
---	-----------	-----------------------------------------------------------------------------------------------------------------------------------------------	------------------------------------------------------------------


5	$7 \times 2 =$	<input style="width: 100%; height: 20px;" type="text"/> 	<input style="width: 60%; height: 60px;" type="text"/> 1 mark
---	----------------	-----------------------------------------------------------------------------------------------------------------------------------------------	------------------------------------------------------------------


6	$\square - 40 = 10$	<input style="width: 100%; height: 20px;" type="text"/> 	<input style="width: 60%; height: 60px;" type="text"/> 1 mark
---	---------------------	-----------------------------------------------------------------------------------------------------------------------------------------------	------------------------------------------------------------------

7	$12 + 9 =$	<input type="text"/>	 1 mark
---	------------	----------------------	-----------------------------------------------------------------------------------------------

8	$7 \times 10 =$	<input type="text"/>	 1 mark
---	-----------------	----------------------	-----------------------------------------------------------------------------------------------

9	$57 - \square = 51$	<input type="text"/>	 1 mark
---	---------------------	----------------------	------------------------------------------------------------------------------------------------

10	$7 + 2 + 4 =$	<input type="text"/>	 1 mark
----	---------------	----------------------	-------------------------------------------------------------------------------------------------

11	$\begin{array}{r} 33 \\ + 16 \\ \hline \end{array}$	<input type="text"/>	 1 mark
----	-----------------------------------------------------	----------------------	-------------------------------------------------------------------------------------------------

12	$\begin{array}{r} 64 \\ - 51 \\ \hline \end{array}$	<input type="text"/>	 1 mark
----	-----------------------------------------------------	----------------------	-------------------------------------------------------------------------------------------------